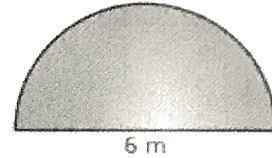
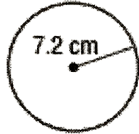
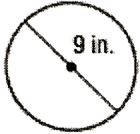


Name: \_\_\_\_\_

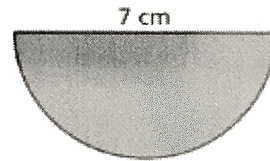
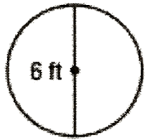
HW # \_\_\_\_\_

$$C = \pi d$$

1.) Find the circumference of each circle. Round to the nearest tenth.



2.) Find the circumference of each circle. Keep your answer in terms of pi.



3.) Point State Park Fountain in Pittsburgh, Pennsylvania has a diameter of 150 ft. The State Park Assembly wants to put stone around the fountain at a cost of \$2.00 per foot. How much would it cost to put stone around the entire fountain?

