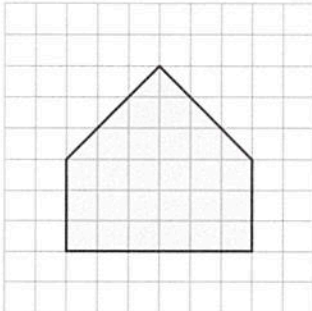


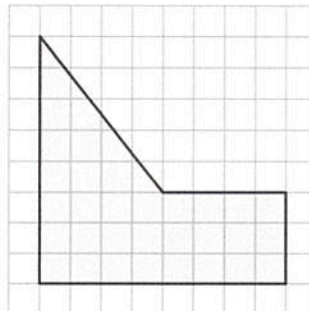
**Chapter
8**

Find the area of the figure.

11.



12.



Answers

11. _____

12. _____

13. _____

14. _____

15. _____

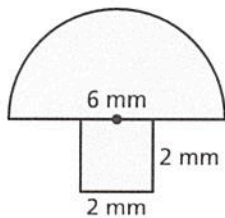
16. _____

17. a. _____

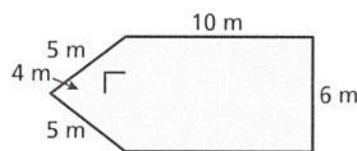
b. _____

Find the perimeter and area of the figure. *Round to tenth.*

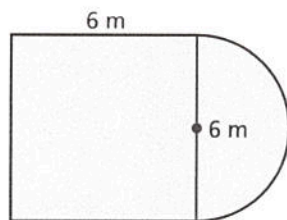
13.



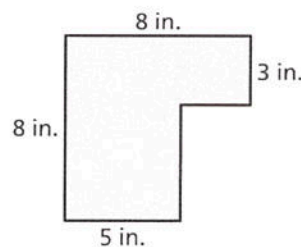
14.



15.



16.



17. A square table 4 feet on each side has two drop leaves, each a semicircle 4 feet in diameter.

a. Find the area of the table with and without the drop leaves.

b. Find the perimeter of the table with and without the drop leaves.

