

Name: _____

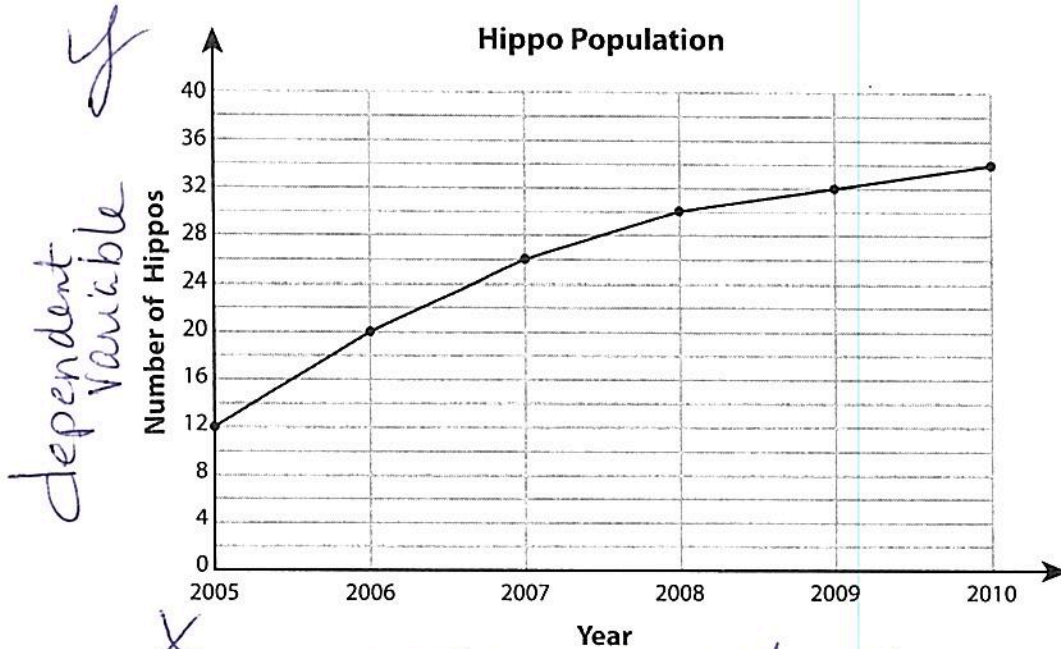

DATE: 10/3/18

Test Review

Period: _____

Line Graph - Hippopotamus Population

A wildlife biologist made a study on the population growth of hippopotamus and recorded the information on a graph. Answer the questions based on the graph.



1) In 2010, what was the population of hippopotamus?

34 hippos

2) How many hippos were there in 2007?

26 hippos

3) In which year did the hippo population reach 30 in number?

2008

4) Which year recorded the minimum hippo population?

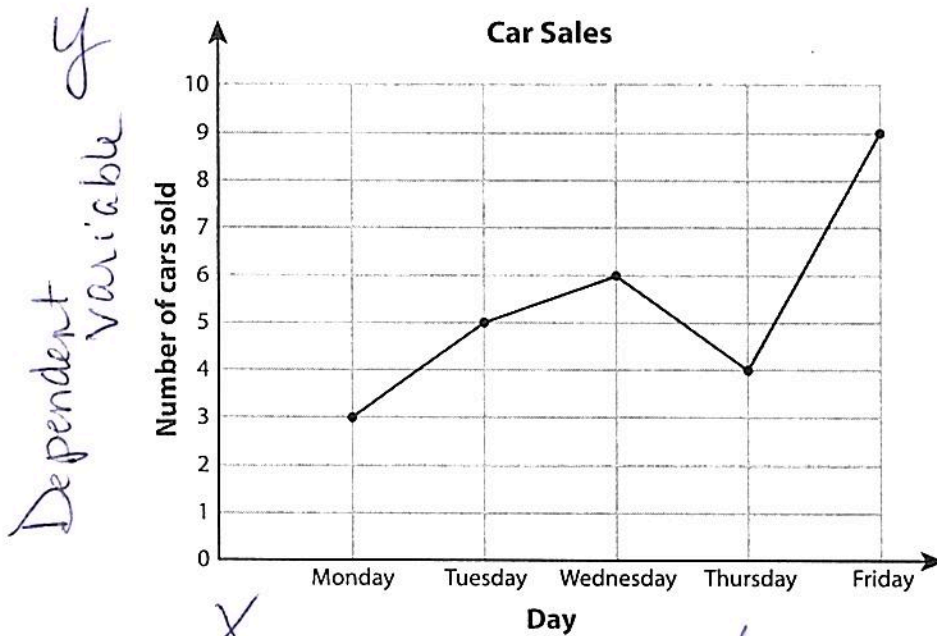

2005

5) How many more hippos were recorded in the year 2008 than in 2006?

30 - 20 = 10 hippos

Line Graph - Car Sales

George works as a salesman in an authorized car showroom. He records the number of cars sold in five days (Monday to Friday) on a line graph. Study the graph and answer the questions.



1) How many cars were sold in 5 days?

27 cars

2) On which day were the maximum number of cars sold?

Friday

3) How many cars were sold on Wednesday?

6 cars

4) Which day had the minimum sales of cars?

Monday

5) How many more cars were sold on Tuesday than on Monday?

$5 - 3 =$
2 cars